
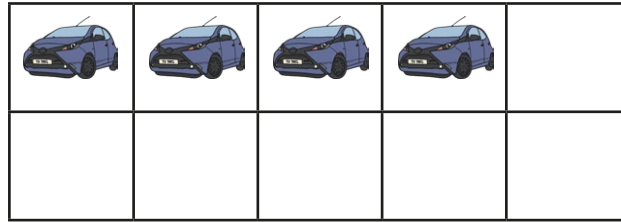


Make 10 Cars


Complete the number sentence to make 10.




$$7 + \square = 10$$




$$4 + \square = 10$$



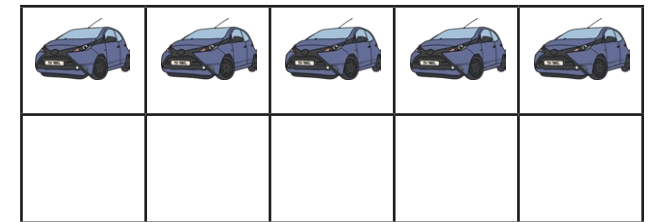
$$2 + \square = 10$$



$$9 + \square = 10$$




$$1 + \square = 10$$




$$5 + \square = 10$$

Make 10 Cars


Complete the number sentence to make 10.




$$6 + \square = 10$$



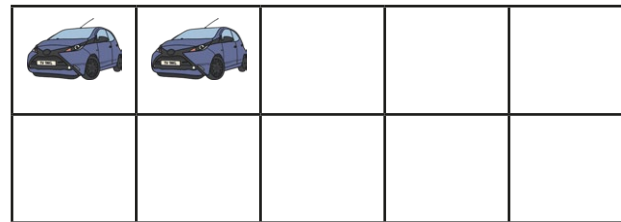
$$3 + \square = 10$$



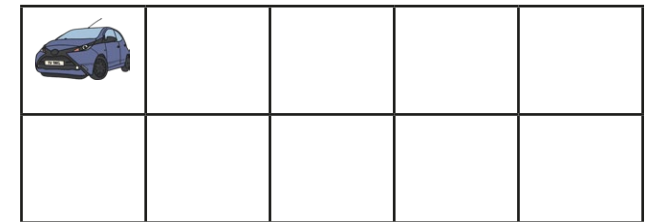
$$5 + \square = \square$$



$$\square + \square = \square$$



$$\square + \square = \square$$



$$\square + \square = \square$$

Write your own number sentence: $\square + \square =$

Make 10 Cars Answers

1. $7 + 3 = 10$

2. $4 + 6 = 10$

3. $2 + 8 = 10$

4. $9 + 1 = 10$

5. $1 + 9 = 10$

6. $5 + 5 = 10$

1. $6 + 4 = 10$

2. $3 + 7 = 10$

3. $5 + 5 = 10$

4. $7 + 3 = 10$

5. $2 + 8 = 10$

6. $1 + 9 = 10$

7. Answers may vary.