







Name.....

Date.....

LO: Recognise that tenths arise from dividing an object into 10 equal parts

	Fraction	Decimal	Words
<p>What fraction of the box of heads are wearing sunglasses?</p> 			
<p>What fraction of the box of heads are smiling?</p> 			
<p>What fraction of the box of heads have no eyebrows?</p> 			
<p>What fraction of the box of heads have teeth?</p> 			
<p>What fraction of the box of heads have hair?</p> 			
<p>What fraction of the box of heads are not happy?</p> 			
<p>Challenge: Can you write a problem of your own, using tenths in decimals and fractions?</p>			