



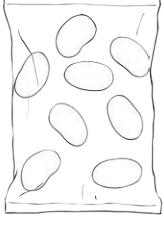





# Calculating Totals

I can add amounts of money.



					
lollipop 18p	fizzy sweets 14p	chocolate bar 29p	toffee apple 45p	jelly beans 26p	bag of toffees 37p

1) Calculate total cost of the following items. Show your working out.

a) a bag of jelly beans and a lollipop.





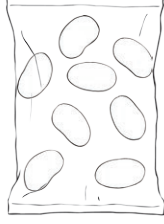

b) a bag of toffees and a toffee apple.

c) 2 lollipops and a chocolate bar.

d) a bag of jelly beans, a bag of toffees and 2 lollipops.



2) You have £1 to spend on sweets. Do you have enough money to buy the following?  
Tick 'Yes' or 'No'. Show your working out.

					
lollipop 18p	fizzy sweets 14p	chocolate bar 29p	toffee apple 45p	jelly beans 26p	bag of toffees 37p

a) a toffee apple and a bag of toffees.

yes  no

b) 3 bags of jelly beans and 4 packs of fizzy sweets.

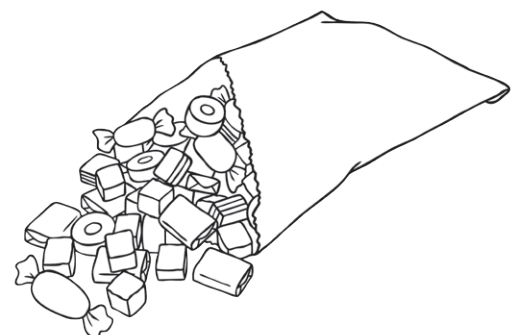
yes  no

c) 2 chocolate bars and a bag of toffees.

yes  no

d) 2 lollipops and a toffee apple.

yes  no





# Calculating Totals **Answers**

Question	Answer
1.	Calculate total cost of the following items. Show your working out.
a.	<i>44p</i>
b.	<i>82p</i>
c.	<i>65p</i>
d.	<i>99p</i>
2.	You have £1 to spend on sweets. Do you have enough money to buy the following? Tick 'Yes' or 'No'. Show your working out.
a.	<i>82p - Yes</i>
b.	<i>£1.34 - No</i>
c.	<i>95p - Yes</i>
d.	<i>81p - Yes</i>