



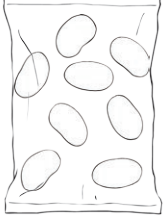



Calculating Totals

I can add amounts of money.



					
lollipop 28p	fizzy sweets 16p	chocolate bar 39p	toffee apple 35p	jelly beans 36p	bag of toffees 44p

1) Calculate total cost of the following items. Show your working out.

a) a bag of toffees and a lollipop.





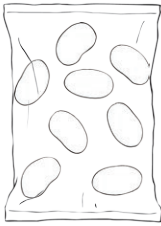

b) a pack of fizzy sweets and a toffee apple.

c) a lollipop, a pack of fizzy sweets a bag of jelly beans.

d) 2 packs of fizzy sweets, a lollipop and a chocolate bar.



2) You have £1 to spend on sweets. Do you have enough money to buy the following?
Tick 'Yes' or 'No'. Show your working out.

					
lollipop 28p	fizzy sweets 16p	chocolate bar 39p	toffee apple 35p	jelly beans 36p	bag of toffees 44p

a) a toffee apple and a bag of toffees.

yes no

b) 2 bags of jelly beans and 3 packs of fizzy sweets.

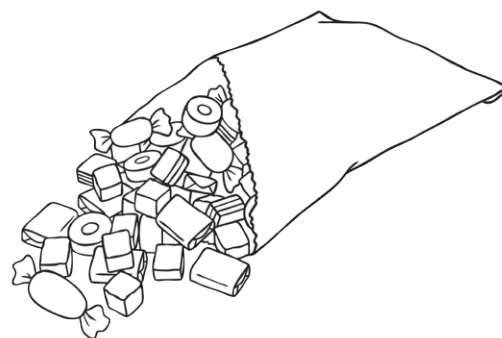
yes no

c) 2 chocolate bars and a bag of toffees.

yes no







d) 2 lollipops and a toffee apple.

yes no





3) Calculate the missing item to make each statement correct.


					
lollipop 28p	fizzy sweets 16p	chocolate bar 39p	toffee apple 35p	jelly beans 36p	bag of toffees 44p

a) a chocolate bar and _____ will cost 55p.

b) a bag of jelly beans and _____ will cost 71p.

c) a bag of toffees and _____ will cost 83p.

d) a pack of fizzy sweets, a bag of jelly beans and _____ will cost 87p.





Calculating Totals Answers

Question	Answer
1.	Calculate total cost of the following items. Show your working out.
a.	72p
b.	51p
c.	80p
d.	99p
2.	You have £1 to spend on sweets. Do you have enough money to buy the following? Tick 'Yes' or 'No'. Show your working out.
a.	79p - Yes
b.	£1.20 - No
c.	£1.22 - No
d.	91p - Yes
3.	Calculate the missing item to make each statement correct.
a.	a chocolate bar and <i>a pack of fizzy sweets</i> total 55p.
b.	a bag of jelly beans and <i>a toffee apple</i> total 71p.
c.	a bag of toffees and a <i>chocolate bar</i> total 83p.
d.	a chewy bar, a bag of jelly beans and <i>a toffee apple</i> total 87p.